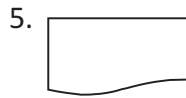
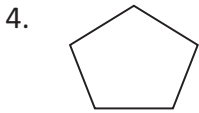
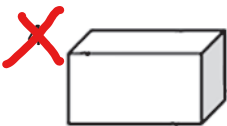
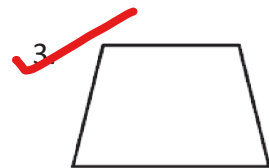
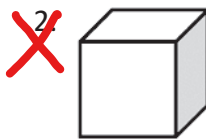


A. Count and write the number of straight and curved edges in each shape.



	Straight edges	Curved edges		Straight edges	Curved edges
1.	2	2	4.	5	0
2.	0	2	5.	3	1
3.	2	2	6.	2	2

B. Tick (✓) the 2D shapes and put a cross (×) on the 3D shapes.



C. Name the 3D shapes in the objects given.



1. Cube

2. Cube

3. Cone

4. Cylinder



5. Cone

6. Cylinder

7. Cone

8. Cuboid

**D. Complete the tiling by colouring the tiles suitably**

